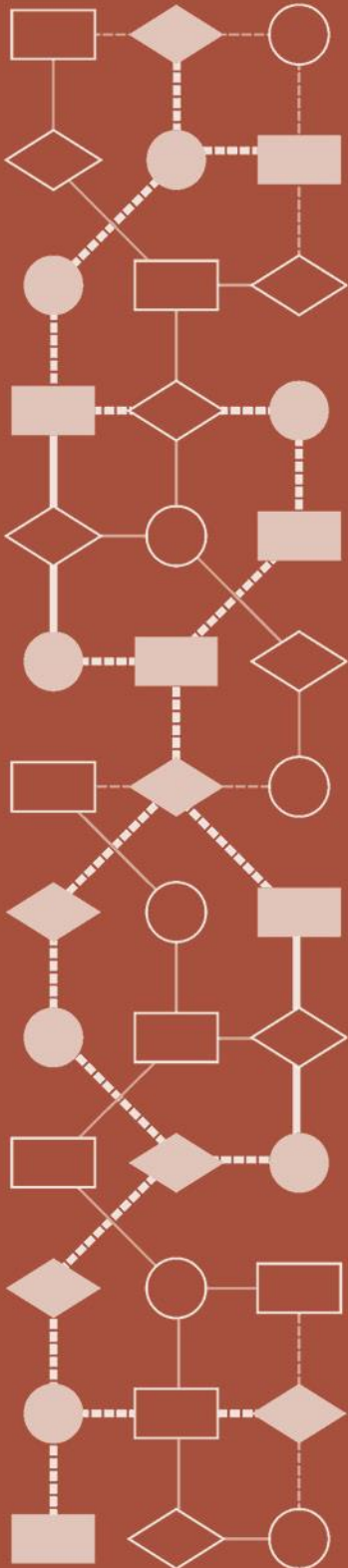


Mathematics Assessment Project  
**CLASSROOM CHALLENGES**  
A Formative Assessment Lesson

# Modeling Population Growth: *Having Kittens*

Mathematics Assessment Resource Service  
University of Nottingham & UC Berkeley

For more details, visit: <http://map.mathshell.org>  
© 2015 MARS, Shell Center, University of Nottingham  
May be reproduced, unmodified, for non-commercial purposes under the Creative Commons license  
detailed at <http://creativecommons.org/licenses/by-nc-nd/3.0/> - all other rights reserved



# Modeling Population Growth: *Having Kittens*

## MATHEMATICAL GOALS

This lesson unit is intended to help you assess how well students are able to:

- Interpret a situation and represent the constraints and variables mathematically.
- Select appropriate mathematical methods to use.
- Make sensible estimates and assumptions.
- Investigate an exponentially increasing sequence.
- Communicate their reasoning clearly.

## COMMON CORE STATE STANDARDS

This lesson relates to **all** the *Standards for Mathematical Practices* in the *Common Core State Standards for Mathematics*, with a particular emphasis on Practices 1, 2, 3, 4, 5, 6, and 7:

1. Make sense of problems and persevere in solving them.
2. Reason abstractly and quantitatively.
3. Construct viable arguments and critique the reasoning of others.
4. Model with mathematics.
5. Use appropriate tools strategically.
6. Attend to precision.
7. Look for and make use of structure.
8. Look for and express regularity in repeated reasoning.

This lesson gives students the opportunity to apply their knowledge of the following *Standards for Mathematical Content* in the *Common Core State Standards for Mathematics*:

- N-Q: Reason quantitatively and use units to solve problems.
- F-LE: Construct and compare linear, quadratic, and exponential models and solve problems.

## INTRODUCTION

This lesson is designed to help students develop strategies for modeling. Note that a video of this lesson is available in the professional development materials.

- Before the lesson, students attempt the problem individually. You then review their work and write questions to help students improve their solutions.
- At the start of the lesson, students work individually answering your questions. Then, in small groups, students work collaboratively on the task before evaluating some sample solutions. In a whole-class discussion, students explain and compare the alternative solution strategies they have seen and used.
- In a follow-up lesson, students review what they have learned.

## MATERIALS REQUIRED

- Each individual student will need a calculator, a copy of the *Having Kittens* task and the *How Did You Work?* questionnaire, a mini-whiteboard, pen, and eraser.
- Each small group will need the *Sample Responses to Discuss*, a large sheet of poster paper, and a felt-tipped pen. Graph paper should be kept in reserve and used only when requested.
- There is a projector resource to help you with whole-class discussions. Spreadsheet software might also be helpful if available.

## TIME NEEDED

20 minutes before the lesson, a 100-minute lesson (or two 55-minute lessons), and 15 minutes in a follow-up lesson. Timings are approximate. Exact timings will depend on the needs of your class.

## BEFORE THE LESSON

### Assessment task: *Having Kittens* (20 minutes)

Ask students to do this task in class or for homework a day or more before the formative assessment lesson. This will give you an opportunity to assess the work and to find out the kinds of difficulties students have with it. You should then be able to target your help more effectively in the subsequent lesson.

Give out the *Having Kittens* task:

*This is a poster made by a cat charity, encouraging people to have their cats spayed so they can't have kittens.*

*The activity is about what happens if you don't have your cat spayed. Your task is to decide whether the statement on the poster is correct.*

*Is it realistic that one female cat would produce 2000 descendants in 18 months?*

*You are given some facts about cats and kittens that will help you decide.*

It is important that, as far as possible, students are allowed to answer the questions without assistance.

Students who sit together often produce similar answers and then when they come to compare their work, they have little to discuss. For this reason, we suggest that when students do the task individually, you ask them to move to different seats. Then at the beginning of the formative assessment lesson, allow them to return to their usual seats. Experience has shown that this produces more profitable discussions.

### Assessing students' responses

Collect students' responses to the task. Make some notes on what their work reveals about their current levels of understanding and their different problem solving approaches. The purpose of doing this is to forewarn you of issues that will arise during the lesson itself, so that you may prepare carefully.

We suggest that you do not score students' work. The research shows that this will be counterproductive, as it will encourage students to compare their scores and will distract their attention from what they can do to improve their mathematics.


Instead, help students to make further progress by summarizing their difficulties as a series of questions. Some suggestions for these are given in the *Common issues* table on page T-4. These have been drawn from common difficulties observed in trials of this lesson unit.

We suggest you make a list of your own questions, based on your students' work. We recommend you either:

- write one or two questions on each student's work, or

### Having Kittens

Here is a poster published by an organization that looks after stray cats.



*Cats can't add but they do multiply!*

In just 18 months, this female cat can have 2000 descendants.

Work out whether this number of descendants is realistic.  
Here are some facts that you will need:

Length of pregnancy About <b>2 months</b>	Age at which a female cat can first get pregnant About <b>4 months</b>	Number of kittens in a litter Usually <b>4 to 6</b>
Average number of litters a female cat can have in one year <b>3</b>	Age at which a female cat no longer has kittens About <b>10 years</b>	

- give each student a printed version of your list of questions and highlight the questions for each individual student.

If you do not have time to do this, you could select a few questions that will be of help to the majority of students and write these on the board when you return the work to the students at the beginning of the lesson. You may also want to note students with a particular difficulty, so that you can ask them about that issue in the formative lesson.

**Common issues:****Suggested questions and prompts:**

<p><b>Has difficulty getting started</b></p>	<ul style="list-style-type: none"> <li>• What do you know? What do you need to find out?</li> <li>• Can you describe in words what happens during the first five months?</li> </ul>
<p><b>Does not develop a suitable representation for the problem</b></p>	<ul style="list-style-type: none"> <li>• Can you produce a diagram or table to show what is happening?</li> <li>• Can you show time elapsing on your diagram?</li> <li>• How can you show which kittens are descended from which?</li> <li>• How can you show the numbers of kittens at each month?</li> </ul>
<p><b>Produces work that is unsystematic</b></p>	<ul style="list-style-type: none"> <li>• Can you think of a way of breaking the task into manageable chunks?</li> <li>• Could you start by just looking at the litters from the first cat? What could you do after that?</li> <li>• Can you now look systematically at what happens to her kittens? And their kittens?</li> </ul>
<p><b>Develops a partial model</b>  For example: The student only considers litters from the original cat.  Or: The student only considers the first litter at each generation.</p>	<ul style="list-style-type: none"> <li>• Do you think the first litter of kittens will have time to grow and have litters of their own? Then what about their kittens?</li> <li>• Do you think the first cat will have more than one litter? What about her kittens?</li> </ul>
<p><b>Does not make assumptions explicit</b>  For example: The student does not state their assumption that all litters occur in the first six months of the year.  Or: The student does not state that they are assuming all the kittens are female.</p>	<ul style="list-style-type: none"> <li>• What have you assumed here?</li> </ul>
<p><b>Makes unreasonable assumptions</b>  For example: The student decides that all the kittens born in a year are born at the <b>beginning</b> of that year.</p>	<ul style="list-style-type: none"> <li>• Is your assumption that [all these kittens are born at the beginning of the year] reasonable?</li> </ul>
<p><b>Makes a successful attempt</b></p>	<ul style="list-style-type: none"> <li>• Do you think your work gives the maximum possible number of kittens? How can you be sure?</li> <li>• Can you find a different way of presenting your analysis? Which way is clearest?</li> <li>• Do you think your answer is an overestimate or underestimate? Why? Can you suggest reasonable bounds for your estimate?</li> </ul>

## SUGGESTED LESSON OUTLINE

### Individual review (10 minutes)

Give each student a mini-whiteboard, pen, and eraser. Begin the lesson by briefly reintroducing the problem:

*Do you remember the problem I asked you to do last time? Today you are going to work together to improve your initial attempts.*

*First, though, I would like you to work individually again. I have looked at your work and I have some questions on it. Read through the questions I have written about your work.*

*Use your mini-whiteboard to note answers to these questions.*

It is helpful to ask students to write their ideas on a mini-whiteboard, as you will be able to monitor their work more easily. This will also help students to share their ideas easily later in the lesson.

### Collaborative activity: producing a joint solution (20 minutes)

The time given for this activity is an approximate guide. You may find your class would benefit from spending more (or less) time on this activity.

Organize the class into groups of two or three students and give each group a large sheet of paper and a felt-tipped pen. Ask students to try the task again, this time combining their ideas.

*I want you to work in groups now.*

*Your task is to produce a solution that is better than your individual solutions.*

*Take turns to explain how you did the task and how you now think it could be improved. Then, put your individual work aside and try to produce a joint solution to the problem.*

While students work in small groups you have two tasks: to note different student approaches to the task and to support student problem solving.

#### Note different student approaches to the task

Listen and watch students carefully. In particular, notice any difficulties that students encounter with what they are doing and the ways they justify and explain to each other. Some students may take a diagrammatic or graphical approach, while others may take a more numerical one. A few students may develop an algebraic approach. Notice also if students monitor their own progress. If there is lack of progress, are they prepared to improve or change strategy? What assumptions do students make? Are they aware of these assumptions and the effect they have on their solution?

#### Support student problem solving

If a student struggles to get started, encourage them to ask a specific question about the task. Articulating the problem in this way can sometimes offer a direction to pursue that was previously overlooked. However, if the student needs their question answered, ask another member of the group for a response.

*What is known and what is unknown?*

*What are you asked to find out?*

*What kind of representation will help you tackle this problem?*

Try not to make suggestions that move students towards a particular approach to this task. Instead, ask questions that help students to clarify their thinking and encourage checking:

*Can you set out your work using a table or diagram? What would be a good way?*

*How many cats/kittens will there be after 6 months? 12 months? ... ?*

*What assumptions have you made?*

*How can you check your solution?*

*Do you think there is just one solution?*

You may also want to use the questions in the *Common issues* table.

If the whole-class is struggling on the same issue, write relevant questions on the board. You could also ask students who performed well on the assessment to help struggling students. If, after several minutes, students are having difficulty making any progress at all you could hand out one of the *Sample Responses to Discuss* to get them started.

Ask each group of students you visit to review their progress.

*What is your strategy for solving this problem?*

*What do you know now that you did not know before?*

*Are you going to continue with this strategy?*

*Are there any other approaches you could try?*

The purpose of these questions is to help students learn to track and review their problem solving strategies. It is important you ask these review questions of students who are and are not following what you know to be productive approaches, whether or not they are stuck. Otherwise, students will learn that your questions are really a prompt to switch strategy!

### **Sharing posters (15 minutes)**

After students have had sufficient time to attempt the problem, ask one student from each group to visit another group's poster.

*If you are visiting another group, read through their work. If their work makes sense, explain it in your own words. If the work does not make sense to you, ask for clarification.*

*If you are staying at your desk, either carefully listen to the explanation and check it matches your own thinking or answer the visiting students' questions.*

*You may then want to consider improving your poster.*

### **Sharing different approaches (10 minutes)**

If you think students have produced a variety of representations of the task and/or made a range of assumptions, you may now want to hold a whole-class discussion. If you have noticed some interesting ways of working or some incorrect solutions, you may want to focus the discussion on these. Equally, if you have noticed different groups using similar strategies but making different assumptions you may want to compare answers.

Ask other students to comment on:

- Did they choose a good method for representing the situation?
- Did they make sensible assumptions?
- Is the reasoning correct? Are the calculations accurate?
- Are the conclusions sensible?
- Was the reasoning easy to understand and follow?

### Extending the lesson over two days

If you are taking two days to complete the lesson unit then you may want to end the first lesson here. At the start of the second day, allow students time to familiarize themselves with their posters before moving on to the collaborative analysis of sample responses.

### Collaborative analysis of Sample Responses to Discuss (25 minutes)

Give each group a copy of the three *Sample Responses to Discuss* and ask for written comments. This gives students the opportunity to see further representations and discuss the assumptions made in each case.

*Imagine you are the teacher and have to assess this work.*

*What has each student done correctly?*

*What assumptions have they made?*

*How can their work be improved?*

These questions are summarized on Slide P-2 of the projector resource.

You may decide there is not enough time for each group to work through all three pieces of work. In that case, be selective about which you hand out. For example, groups that have forgotten that a cat may have more than one litter could be given Alice's work, while groups that have forgotten that the kittens from each litter can go on to have their own litters could be given Wayne's work.

### Whole-class discussion: comparing different approaches (20 minutes)

Organize a discussion about what has been learned. Discuss some of the different approaches used in the sample work and ask students to comment on their strengths and weaknesses.

*Which approach did you like best? Why?*

*Which approach did you find most difficult to understand?*

Encourage students to consider the relative merits of the different approaches, justifying their choice for the approach they liked best/found most difficult to understand.

*In what way do you think this solution is better/worse than this one? Why?*

You may also want to compare students' own work with the sample student work.

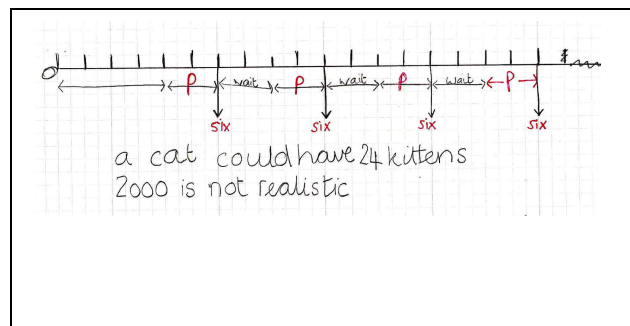
*Did any group use a similar method to Alice, Wayne or Ben?*

*What was same about the work?*

*What was different about the work?*

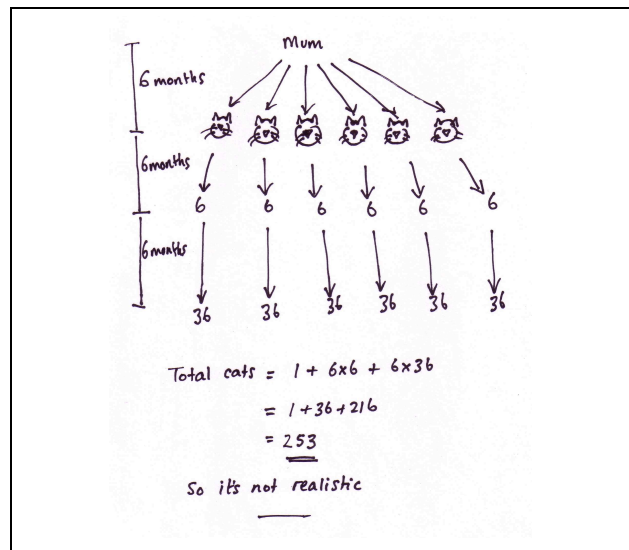
You may want to use Slides P-3, 4, and 5 of the projector resource and the questions in the *Common issues* table to support the discussion.

**Alice** chose to represent the task using a timeline. She has only considered the number of kittens from the original cat. She has used some of the given information correctly and has assumed that 6 cats are born at regular intervals. She has forgotten that these kittens can also have litters of their own. She has not described her reasoning and assumptions.

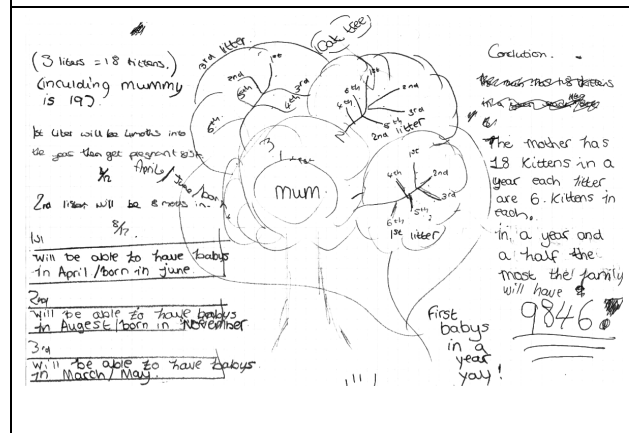




**Wayne** has assumed that the mother has six kittens after 6 months and has considered succeeding generations. He has, however, forgotten that each cat may have more than one litter. He has shown the timeline clearly. Wayne doesn't explain where the 6-month gaps have come from.



**Ben** has decided to draw a 'cat tree' and has tried to control for time (with some errors). The value 9846 is not explained and does not follow from the reasoning since, again, only the kittens from the original cat are considered. The number of kittens per litter is made explicit. Ben has included more explanation than Alice and Wayne.



**Follow-up lesson: individual reflection (15 minutes)**

Display Slide P-6 of the projector resource:

**Reviewing Work**

- I have selected the important facts and used them to solve the problem.
- I am aware of the assumptions I have made and the effect these assumptions have on the result.
- I have used more than one method.
- I have checked whether my results make sense and improved my method if need be.
- I have presented my results in a way that will make sense to others.

Explain to students that they are going to review their work and think about some of the choices they have made when completing the task.

Give each student a copy of the *How Did You Work?* questionnaire.

*Think carefully about your work on this task. On your own, answer the review questions as carefully as you can.*

Some teachers give this as a homework task.

## SOLUTIONS

There are many possible solutions to this problem, depending on the assumptions made.

In a good solution, the student will make assumptions explicit and the chosen method of representation will involve a timeline and record the original cat and all her descendants. The exponential growth will be evident, with both the successive litters from each cat and successive generations considered.

The diagrams below are similar attempts to represent the number of kittens born in each month over an 18-month period.

These are the assumptions made for the first diagram:

- The first cat is already adult and gives birth in month 0.
- Cats become pregnant as soon as possible (at the age of 4 months).
- Litters are spread as evenly as possible across the year (so there is a litter every 4 months).
- Each litter contains six kittens.
- All of these kittens are female and have offspring of their own.
- None of the offspring die.

For the second diagram, it is still assumed that:

- Cats become pregnant as soon as possible (at the age of 4 months).
- Litters are spread as evenly as possible across the year (so there is a litter every 4 months).
- All of the kittens are female and have offspring of their own.
- None of the offspring die.

However, it is now assumed that:

- The first cat gets pregnant in month 0 and so gives birth in month 2.
- Each litter contains just three (female) kittens.

There are thus two major differences in the assumptions made:

- In the first diagram, the cat is assumed to give birth in month 0 (the first pregnancy is not counted as part of the 18-month period). In the second diagram, the cat is assumed to get pregnant in month 0, so she gives birth in month 2.
- In the first diagram, the cat is assumed to have six kittens in a litter. In the second, she has only three kittens per litter.

**Generation of kittens**

Diagram 1

	0	1	2	2	2	2	3	3	3	4	Cum. total
0	1	6									7
1											7
2											7
3											7
4		6									13
5											13
6			36								49
7											49
8		6									55
9											55
10			36	36							127
11											127
12		6					216				349
13											349
14			36	36	36						457
15											457
16		6					216	216	216		1111
17											1111
18			36	36	36	36				1296	2551

Time in months

**Generation of kittens**

Diagram 2

	0	1	2	2	2	3	3	Cum. total
0	1							1
1								1
2		3						4
3								4
4								4
5								4
6		3						7
7								7
8			9					16
9								16
10		3						19
11								19
12			9	9				37
13								37
14		3				27		67
15								67
16			9	9	9			94
17								94
18		3				27	27	151

Time in months

The number of descendants of the cat is much greater in the first diagram than in the second. Changing the set of assumptions has a significant effect on the outcome.

In both of the diagrams all the kittens are assumed to be female. It might be more reasonable to assume that about one-half of each litter is male, but counting of descendants then becomes problematic. How would we count the descendants of male cats? Each male kitten might perhaps make many females pregnant in a short time, so that many more descendants of the first cat could result.

The statement made by the vet appears to be reasonable and might even be a conservative estimate, given the problem of descendants from male kittens.

# Having Kittens

Here is a poster published by an organization that looks after stray cats.

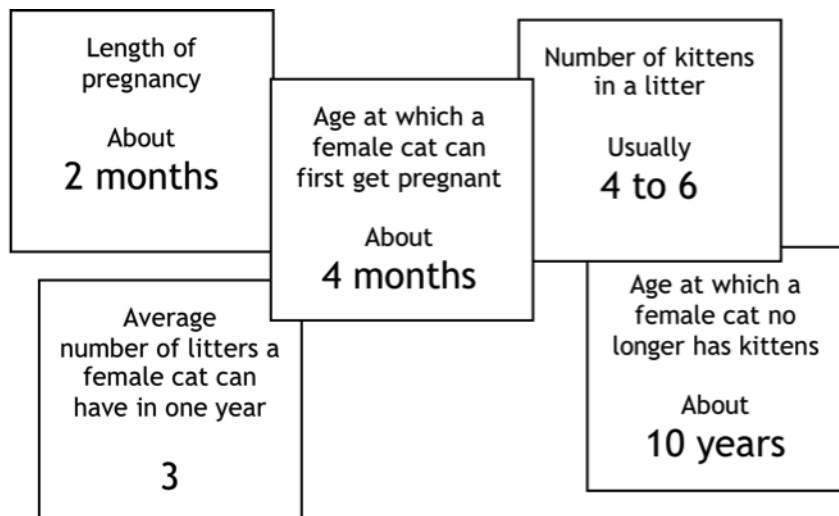


**Cats can't add but they do multiply!**

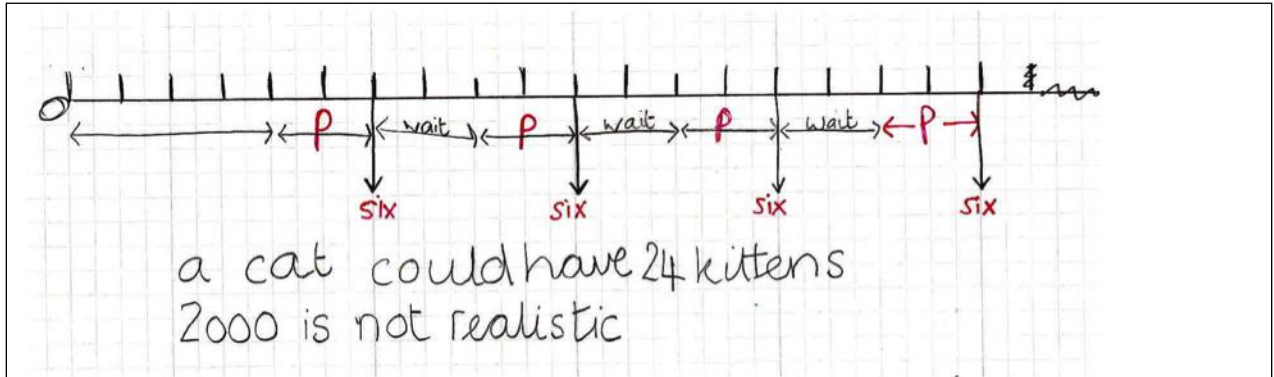
**In just 18 months, this female cat can have 2000 descendants.**

Figure out whether this number of descendants is realistic.

Here are some facts that you will need:



# Sample Responses to Discuss: Alice



What has Alice done correctly?

---

---

---

What assumptions has she made?

---

---

---

How could this solution be improved?

---

---

---

---

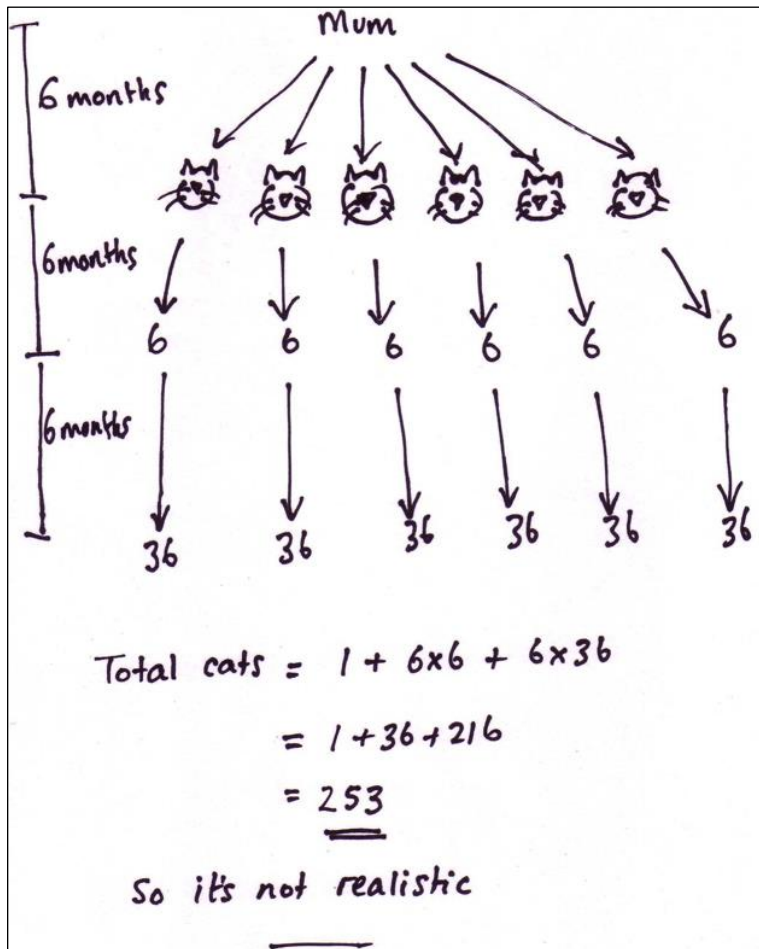
---

---

---

---

# Sample Responses to Discuss: Wayne



What has Wayne done correctly?

---

---

What assumptions has he made?

---

---

How can Wayne's work be improved?

---

---

# Sample Responses to Discuss: Ben

(3 litters = 18 kittens.)  
(including mummy is 19).

1st litter will be litters into the year then get pregnant 8/12

2nd litter will be 8 months in 8/12

3rd litter will be 8 months in 8/12

1st will be able to have babies in April / born in June

2nd will be able to have babies in August / born in November

3rd will be able to have babies in March / May

Conclusion.

The mother has 18 Kittens in a year each litter are 6. Kittens in each.

in a year and a half the most the family will have 9846

First babies in a year yay!

What has Ben done correctly?

---



---

What assumptions has he made?

---



---

How can Ben's work be improved?

---



---



---

# How Did You Work?

Check (✓) the boxes and complete the sentences that apply to your work.

1. Check (✓) the facts you used:

Length of pregnancy  
About  
**2 months**

Age at which a female cat can first get pregnant  
About  
**4 months**

Number of kittens in a litter  
Usually  
**4 to 6**

Average number of litters a female cat can have in one year  
**3**

Age at which a female cat no longer has kittens  
About  
**10 years**

2. I / We checked our work

I / We checked our work by

.....

.....

.....

.....

3. We made some assumptions

These assumptions were

.....

.....

.....

.....

4. Another group has analyzed my poster

They commented that

.....

.....

.....



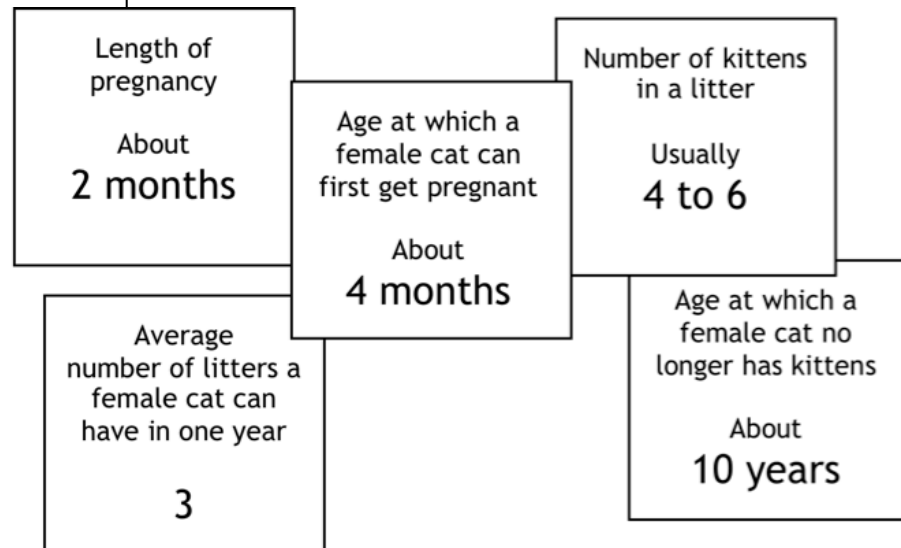
# Having Kittens



Cats can't add but  
they do multiply!

In just 18 months, this female cat  
can have 2000 descendants.

Work out whether this number of  
descendants is realistic.  
Here are some facts that you will  
need:

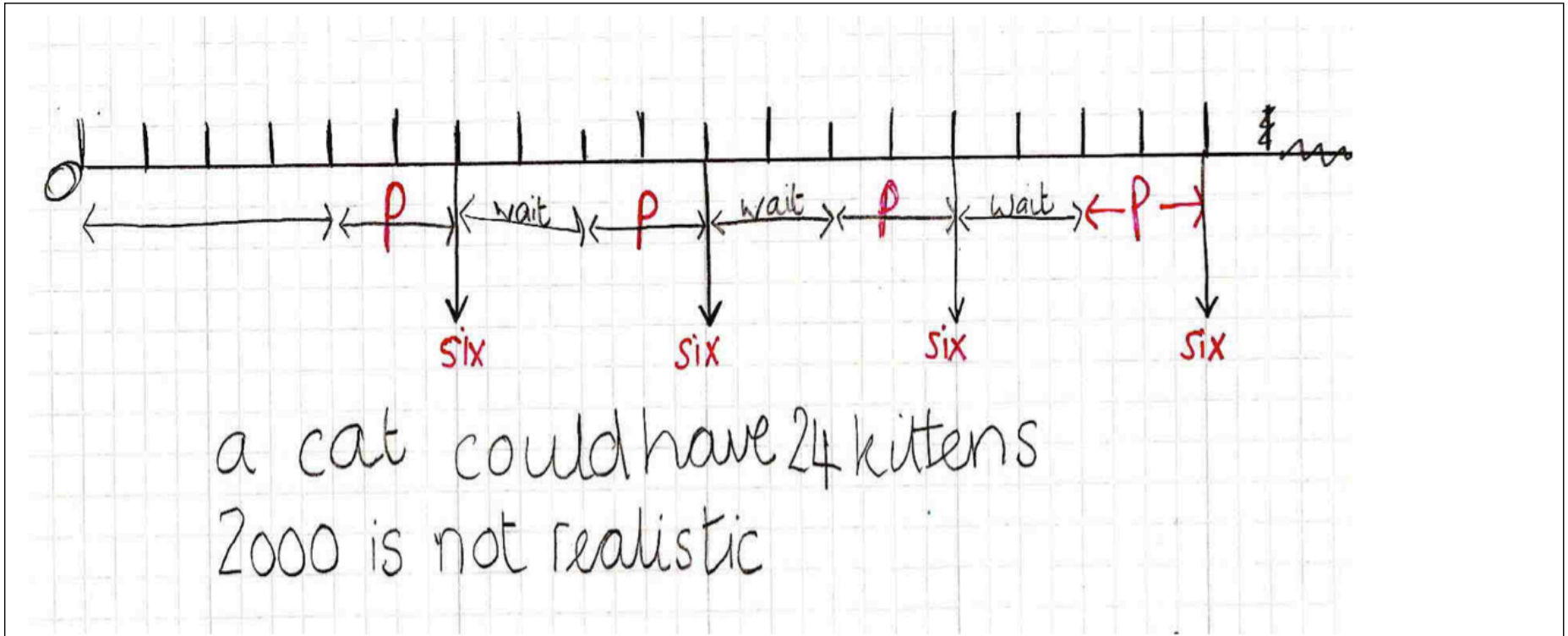


# Analyzing Sample Responses to Discuss

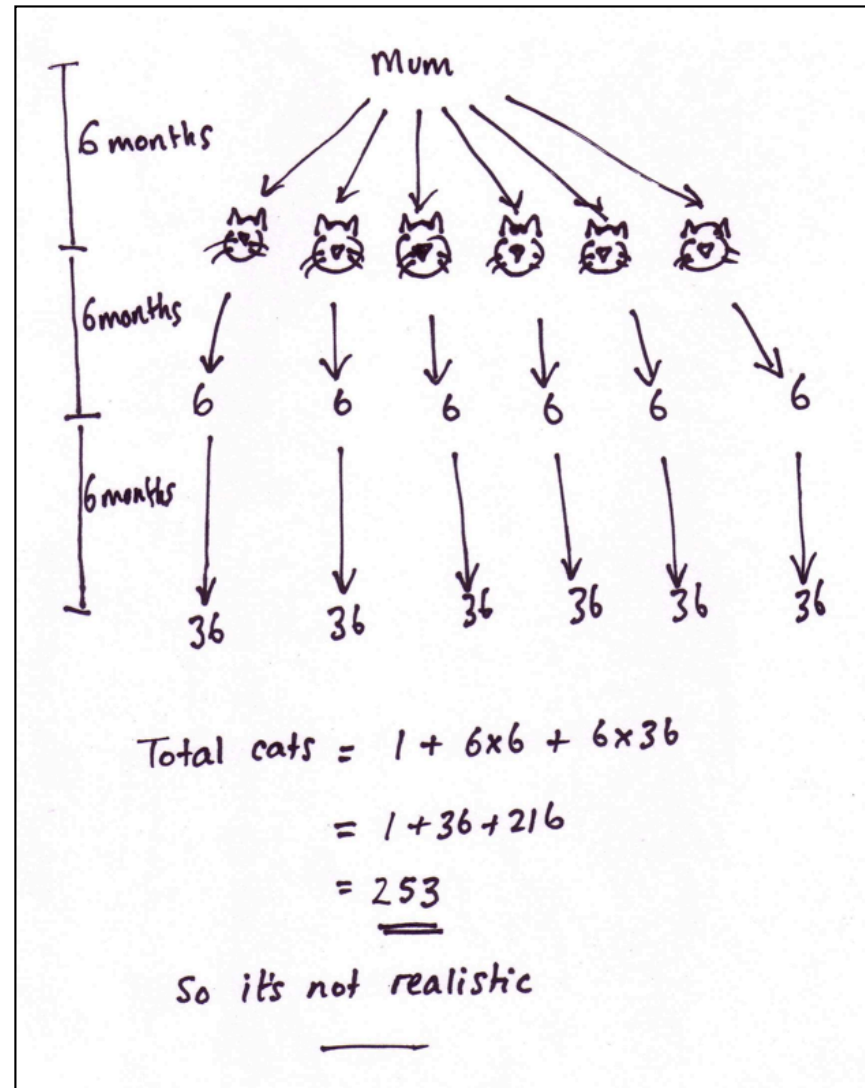
Your task is to correct the work and write comments about its accuracy and organization.

- What has the student done correctly?
- What assumptions has he or she made?
- How could the solution be improved?

# Sample Responses to Discuss: Alice



# Sample Responses to Discuss: Wayne



# Sample Responses to Discuss: Ben

(3 litters = 18 kittens.)  
including mummy is 19.

1st litter will be 4 months into the year then get pregnant 8/12.  
1/12 April / born in June.

2nd litter will be 8 months in-  
8/12.

will be able to have babies in April / born in June.

2nd  
will be able to have babies in August / born in November.

3rd  
will be able to have babies in March / May.

3rd litter.  
1st  
2nd  
3rd  
4th  
5th  
6th

(Cat free)

1st  
2nd  
3rd  
4th  
5th  
6th  
1st litter

1st  
2nd  
3rd  
4th  
5th  
6th  
1st litter

Conclusion.

~~The mother has 18 kittens in a year each litter are 6 kittens in each.~~

The mother has 18 Kittens in a year each litter are 6 Kittens in each.

in a year and a half the most the family will have

9846

First babies in a year yay!

# Reviewing Work

- I have selected the important facts and used them to solve the problem.
- I am aware of the assumptions I have made and the effect these assumptions have on the result.
- I have used more than one method.
- I have checked whether my results make sense and improved my method if need be.
- I have presented my results in a way that will make sense to others.

# Mathematics Assessment Project

## **Classroom Challenges**

These materials were designed and developed by the  
Shell Center Team at the Center for Research in Mathematical Education  
University of Nottingham, England:

**Malcolm Swan,**  
**Nichola Clarke, Clare Dawson, Sheila Evans, Colin Foster, and Marie Joubert**  
with  
**Hugh Burkhardt, Rita Crust, Andy Noyes, and Daniel Pead**

The central task in this lesson was originally designed by **Acumina Ltd.** (<http://www.acumina.co.uk/>)  
for **Bowland Maths** (<http://www.bowlandmaths.org.uk>)  
and appears courtesy of the **Bowland Charitable Trust**

We are grateful to the many teachers and students, in the UK and the US,  
who took part in the classroom trials that played a critical role in developing these materials

The classroom observation teams in the US were led by  
**David Foster, Mary Bouck, and Diane Schaefer**

This project was conceived and directed for  
The Mathematics Assessment Resource Service (MARS) by  
**Alan Schoenfeld** at the University of California, Berkeley, and  
**Hugh Burkhardt, Daniel Pead, and Malcolm Swan** at the University of Nottingham

Thanks also to Mat Crosier, Anne Floyde, Michael Galan, Judith Mills, Nick Orchard, and Alvaro Villanueva who contributed to the design and production of these materials.

This development would not have been possible without the support of  
**Bill & Melinda Gates Foundation**

We are particularly grateful to  
**Carina Wong, Melissa Chabran, and Jamie McKee**

The full collection of Mathematics Assessment Project materials is available from

<http://map.mathshell.org>

© 2015 MARS, Shell Center, University of Nottingham  
This material may be reproduced and distributed, without modification, for non-commercial purposes,  
under the Creative Commons License detailed at <http://creativecommons.org/licenses/by-nc-nd/3.0/>  
All other rights reserved.

Please contact [map.info@mathshell.org](mailto:map.info@mathshell.org) if this license does not meet your needs.